

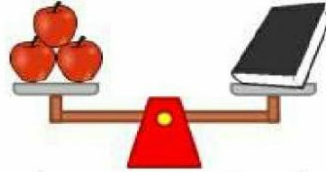
Assignment:-6 Subject: MathsClass:-I

Teacher:-Mrs. Paramjeet Kaur

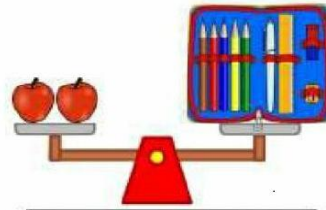
Name:-\_\_\_\_\_ Class &amp; Sec.:-\_\_\_\_\_ Roll No.:-\_\_\_\_\_ Date:-\_\_\_\_\_

**Q1) How many apples does each weigh?**

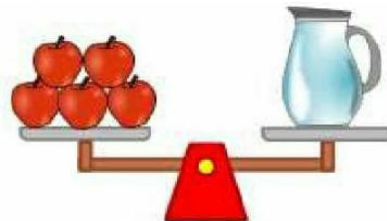
1) The book weighs \_\_\_\_\_ apples.



2) The pencil case weighs \_\_\_\_\_ apples.



3) The pitcher weighs \_\_\_\_\_ apples.



4) The shoe weighs \_\_\_\_\_ apples.



**Q2) Tick (✓) the heavier object and put a cross (x) against the lighter object.**

1)




☐ Heavy ☐ Light

2)



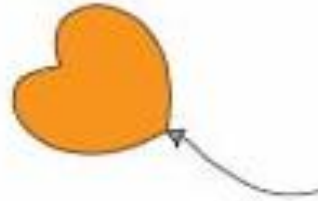
☐ Heavy ☐ Light

3)



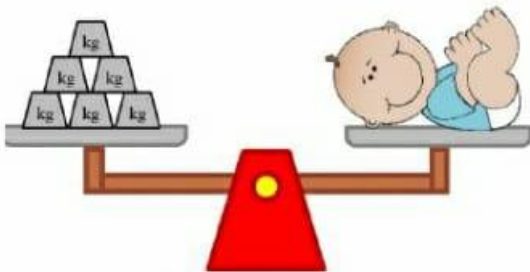
☐ Heavy ☐ Light

4)

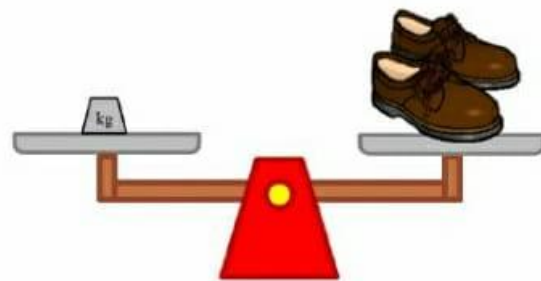


☐ Heavy ☐ Light

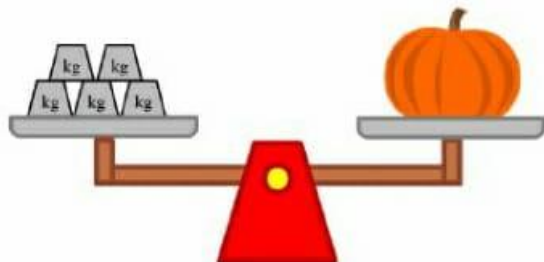
**Q.3) Count at the weights on the weighing scale and write correct answer.**



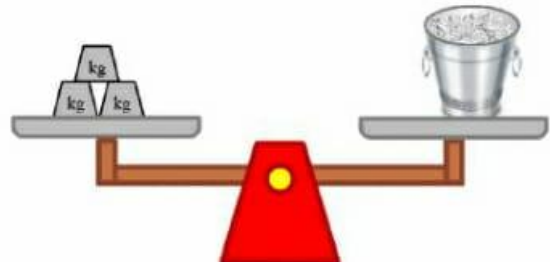
The baby weighs \_\_\_\_ kg.



The pair of shoes weighs \_\_\_\_ kg.



The pumpkin weighs \_\_\_\_ kg.




The ice bucket weighs \_\_\_\_ kg.


**Q.4) Which unit (g/kg) is used to measure the following.**



**1) School Bus :- \_\_\_\_\_**




**2) Paper Clip :- \_\_\_\_\_**



**3) Book :- \_\_\_\_\_**




**4) Boy :- \_\_\_\_\_**




**5) Computer :- \_\_\_\_\_**



**6) Cup :- \_\_\_\_\_**



**7) Toothbrush:- \_\_\_\_\_**



**8) Toy Train :- \_\_\_\_\_**